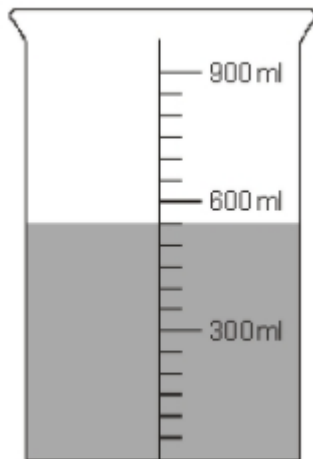


1. Steve needs to put **1 litre** of water in a bucket.
He has a **500 ml** jug.



Explain how he can measure **1 litre** of water.

2.



a) How many millilitres of water are in the jug?

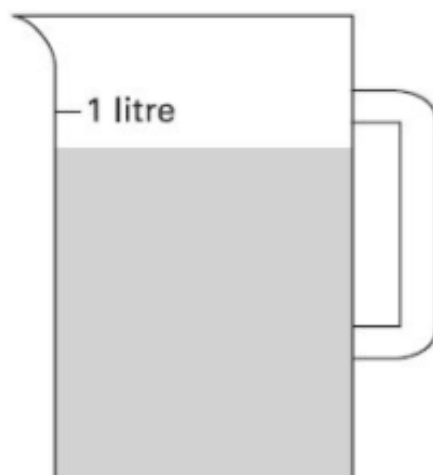
b) Can you convert this into litres?

3.

Sophie poured some water out of a **litre** jug.

Look how much is left in the jug.

Estimate how many millilitres of water are left.




4. This table shows the weight of some fruits and vegetables.
Complete the table.

	grams	kilograms
potatoes	3500	3.5
apples		1.2
grapes	250	
ginger		0.03

- 5.

Look at the parcels on the scales.

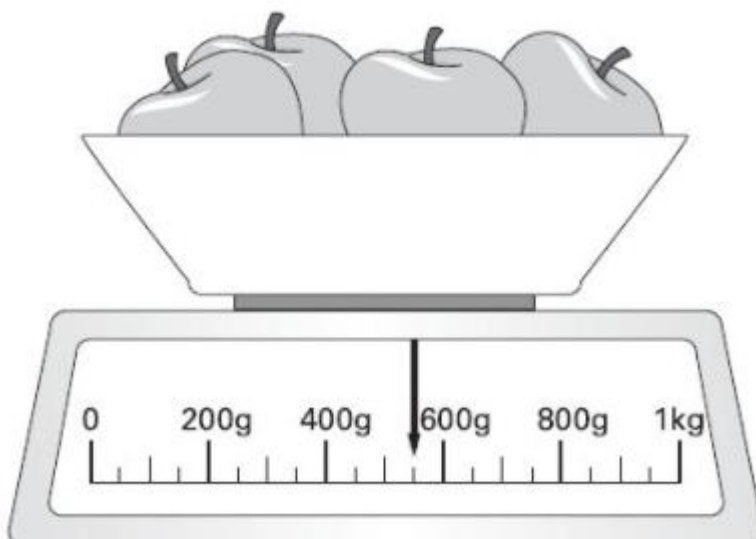


Write them in order, starting from the lightest.

lightest

- 6.

Here are some apples.



Anya says:

'The apples altogether weight less than half a kilogram'.

Is Anya correct?

Explain your answer.