

Fluency Fifteen

Session 5

1. Using the symbols $<$ $>$ $=$, complete the sentence.

$100 + 50$      

2. Can you spot the mistake?

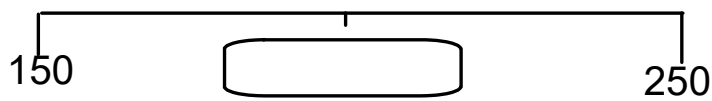
48 44 42 40 36 32

3. $\xrightarrow{\text{is 20 less than}}$ 333


4. Write these measurements in descending order.

353ml 357ml 335ml 350ml 375ml

5. What number should be shown in the box?



6.



7. Which is bigger?

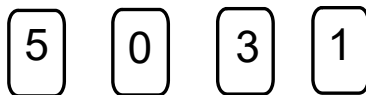
10 more than three hundred or *100 less than four hundred*

8. $900 + \text{___} + \text{___} = 963$

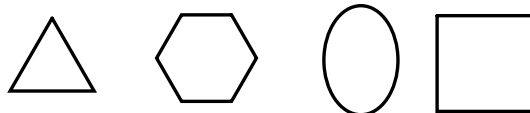
9. $8 \times 5 =$

10. $35 \div \text{___} = 5$

11. Using the digit cards create a multiple of 50 that is less than 300.



12. Which is the odd one out?



13. Which is the lightest box?



14. This month it is April last month it was ___

15. How much more money is need to make £1?



Fluency Fifteen

Session 5

Answers

1. Using the symbols $<$ $>$ $=$, complete the sentence.

$100 + 50$



2. Can you spot the mistake?

48

44

42

40

36


32

3. 313 $\xrightarrow{\text{is 20 less than}}$ 333

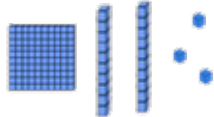
4. Write these measurements in descending order.

375ml 357ml 353ml 350ml 335ml

5. What number should be shown in the box?



6.



$$\begin{array}{c} \text{T} \quad \text{T} \\ - \\ \text{T} \end{array} = 93$$

7. Which is bigger?

10 more than three hundred

or

100 less than four hundred

8. $900 + 60 + 3 = 963$

9. $8 \times 5 = 40$


10. $35 \div 7 = 5$

11. Using the digit cards create a multiple of 50 that is less than 300.

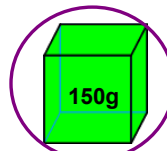
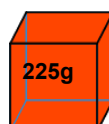
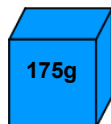
150



12. Which is the odd one out?



13. Which is the lightest box?



14. This month it is April last month it was March.

15. How much more money is need to make £1?

25p

