

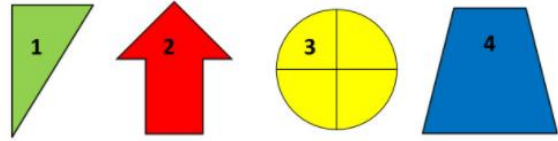


How many vertical lines can you see?



- A
4
- B
3
- C
7
- D
0

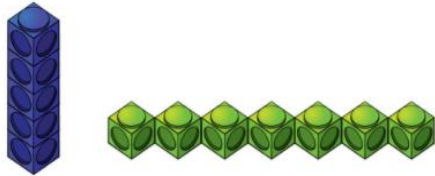
Which shapes have perpendicular lines?



- A
1
- B
1,2,4
- C
1,2
- D
1,2,3



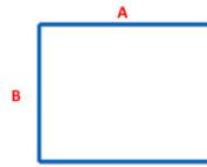
The blue cubes have been placed in a _____ line



- A
vertical
- B
vertically
- C
horizontal
- D
horizontally



To complete the shape below you need a line that is:



- A
Parallel to A
- B
Parallel to C
- C
Perpendicular to B
- D
Parallel to B



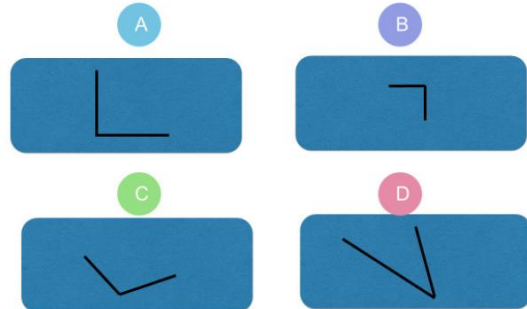
There are _____ right angles.



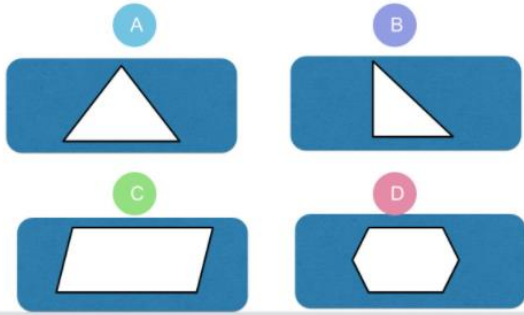
- A
3
- B
6
- C
5
- D
4




Which angle is smaller than a right angle?



Which shape has 3 acute angles?

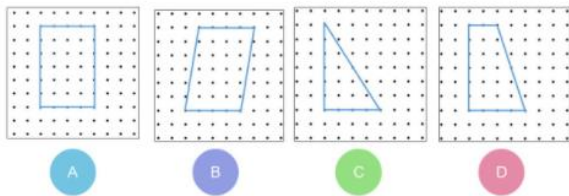


Describe the angle that the arrow is pointing to.

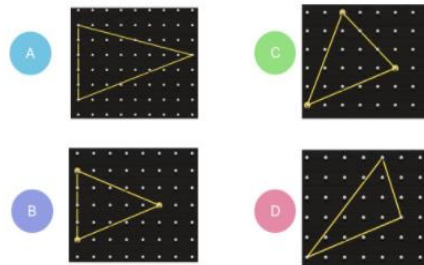


- A
< Right angle
- B
Bigger than a right angle
- C
> Right angle
- D
90°

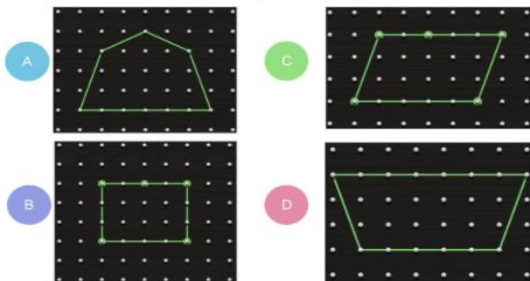
Which shape has the most right angles?



Which of these shapes is a right-angled triangle?




Which of these shapes is a trapezium?



Sophie is making a 2D shape on a Geo board. The bands cannot be moved but more can be added.

What shape could she not make?



- A
square
- B
rectangle
- C
triangle
- D
pentagon

Faye has made a quadrilateral.
She says her shape has:
One pair of perpendicular sides.
One pair of parallel sides.
What shape has she made?

- A
Rectangle
- B
Pentagon
- C
Parallelogram
- D
Trapezium