

Day 3 – Maths

LO: To order and compare numbers to 1,000,000

Today, you are going to use all of your knowledge about place value in Reasoning style questions.

Tips and tricks:

- Read each question carefully.
- Underline the important parts of the question.
- Draw out the place value columns for each question.

1. Write the number 53,148 in **words**.

Look at this number.

697,432




What is the value of the digit **6** in the number?

Circle the correct answer.

six thousand six hundred thousand

2. sixty thousand six million

3. Put these houses in order of price starting with the lowest price.

A  £135,300	B  £119,125	C  £130,500
---	---	---

D  £131,500	E  £91,500
---	--

4. Circle the largest number.

5,055,555

5,555,055

555,555

5,055,055

5. Circle the largest number.

4,944,444

4,444,944

4,994,449

444,444

4,949,444

The below are MCs:

5. Write these masses in order, starting with the **lightest**.

1.25 kg

0.99 kg

1.025 kg

0.009 kg

Write these numbers in order.

One has been done for you.


3.03

3.23

3.3

3

3.2



6.

Answers:

1. Fifty three thousand, one hundred and forty eight.
2. Six hundred thousand
3. Award **ONE** mark for the correct answer as shown:

• E B C D A

Accept:

• £91,500 B £130,500 £131,500 £135,300

4. 5,555,055
5. 4,994,449
6. Masses in correct order, as shown:

0.009 kg	0.99 kg	1.025 kg	1.25 kg
----------	---------	----------	---------

lightest

3.3	largest
3.23	
3.2	
3.03	
3	

7.