


# Fluency Fifteen

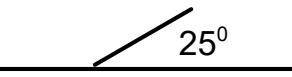
Session 2

## Order from heaviest to lightest:

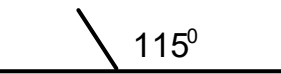
1. 500g    50g    450g    20g    700g
2. 5.6kg    5kg    2.5kg    6.8kg    1kg
3. 200g    2.5kg    3kg    100g    4kg

## Find the missing angle:

4.   $125^\circ$

5.   $25^\circ$

6.   $155^\circ$

7.   $115^\circ$

8.   $167^\circ$

## BODMAS

9.  $25 \times 3 \div 10 =$
10.  $22 - 2 \times 12 =$
11.  $(2+9) \times 4 =$
12.  $10 - 8 \times 3 + 12 =$

## Percentage of a number

13. 10% of 600
14. 40% of 700
15. 65% of 345